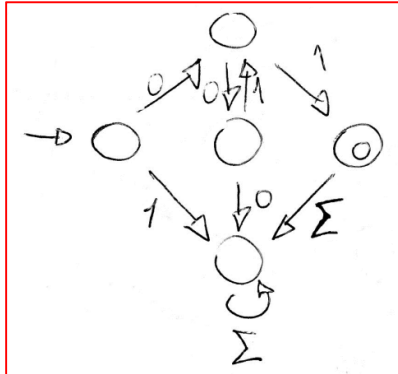
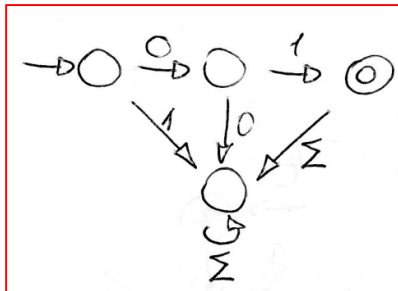


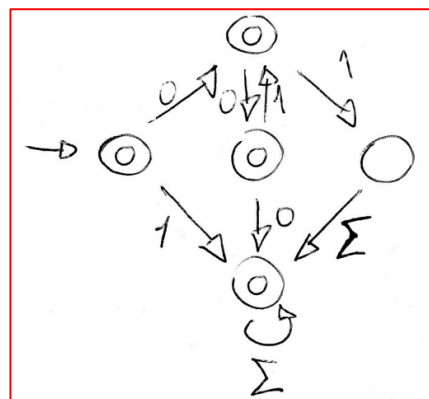
1. (4.0) Determine as linguagens graficamente através de AFDs. Considere $\Sigma = \{0, 1\}$:
- (1.0) $L1 = \{01, 0011, 001011, 00101011, 0010101011, \dots\}$;



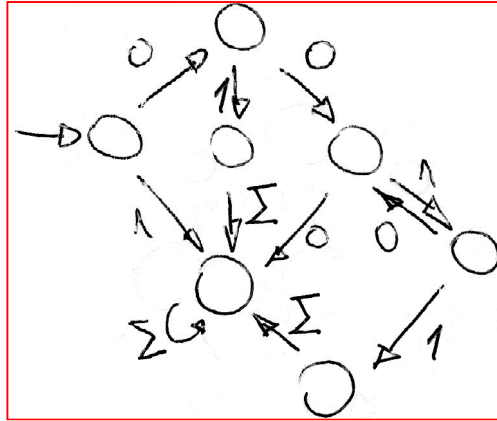
- (1.0) $L2 = \{w \in L1 \mid w \text{ tem o dígito 1 na segunda posição}\}$;



- Construa estes AFDs usando os algoritmos.
 - (1.0) $L3 = \overline{L1}$;




ii. (1.0) $L4 = L2 \cap L3$.



2. (4.0) Determine as linguagens graficamente através de AFNs. Considere $\Sigma = \{0, 1\}$:

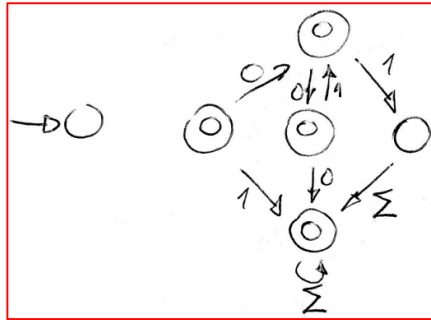
a. Construa este AFN com o menor número de estados e transições;

i. (1.0) $L5 = \{w \in \Sigma \mid |w| > 1\}$.

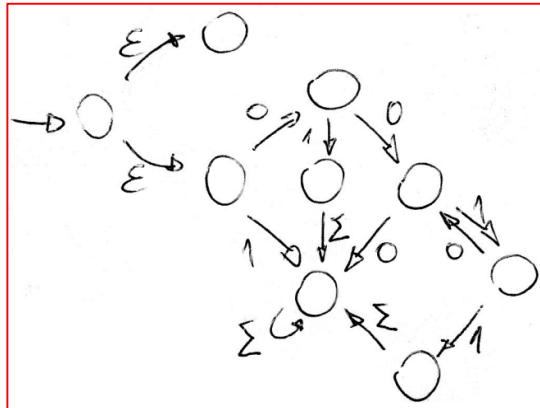


b. Construa estes AFNs usando os algoritmos.


i. (1.0) $L6 = L5 \circ L3$;



ii. (1.0) $L7 = L5 \cup L4$;

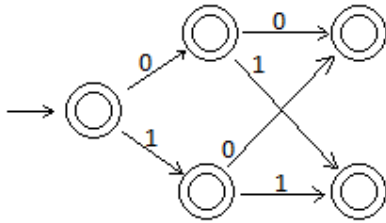


iii. (1.0) $L8 = L5^*$.



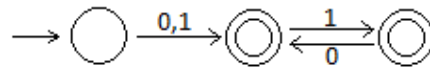
3. (2.0) Determine o conjunto gerado pelos autômatos usando o esquema da compreensão.

a. (1.0)



$\{w \in \Sigma^* \mid |w| \leq 2\}$

b. (1.0)



$\{w \in \Sigma^* \mid w = xy \text{ e } |x| = 1 \text{ e } y \text{ tem } 1 \text{ nas posições ímpares e } 0 \text{ nas posições pares}\}$